



# Compare objects within 50



**I** a) Draw counters to show the apples.




b) Draw counters to show the children.




c) Complete the sentences.


There are  apples.

There are  children.

There are fewer \_\_\_\_\_ than

\_\_\_\_\_

d)



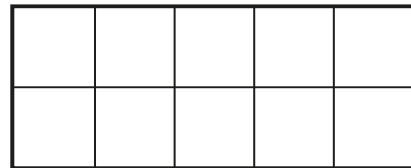
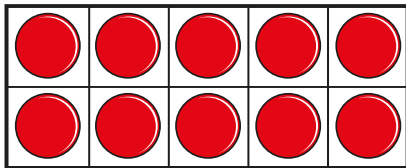
All the children can have one apple.

Is Teddy correct?

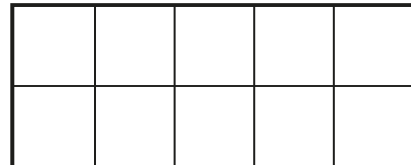
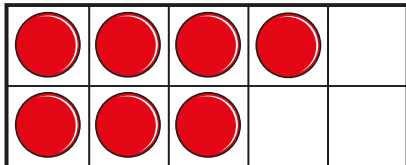


**2** Draw counters to make the statements true.

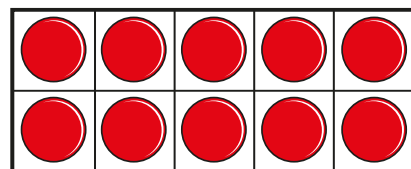
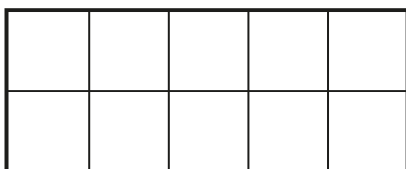
a)



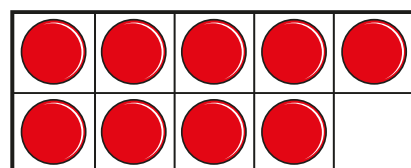
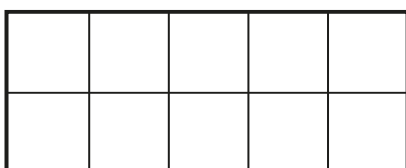
>



b)



>



c)

●	●	●	●	●
●	●	●	●	●

●	●	●	●	●
●	●	●	●	●

 $\angle$ 

●		●		
●			●	

d)

●	●	●		
	●	●	●	

 $=$ 


Is there more than one answer for each?

